

Name \_\_\_\_\_

# Camping Surprise

Start at **2**. Count by **2s** to find where the bear found his treat.



What did the bear find to eat? \_\_\_\_\_

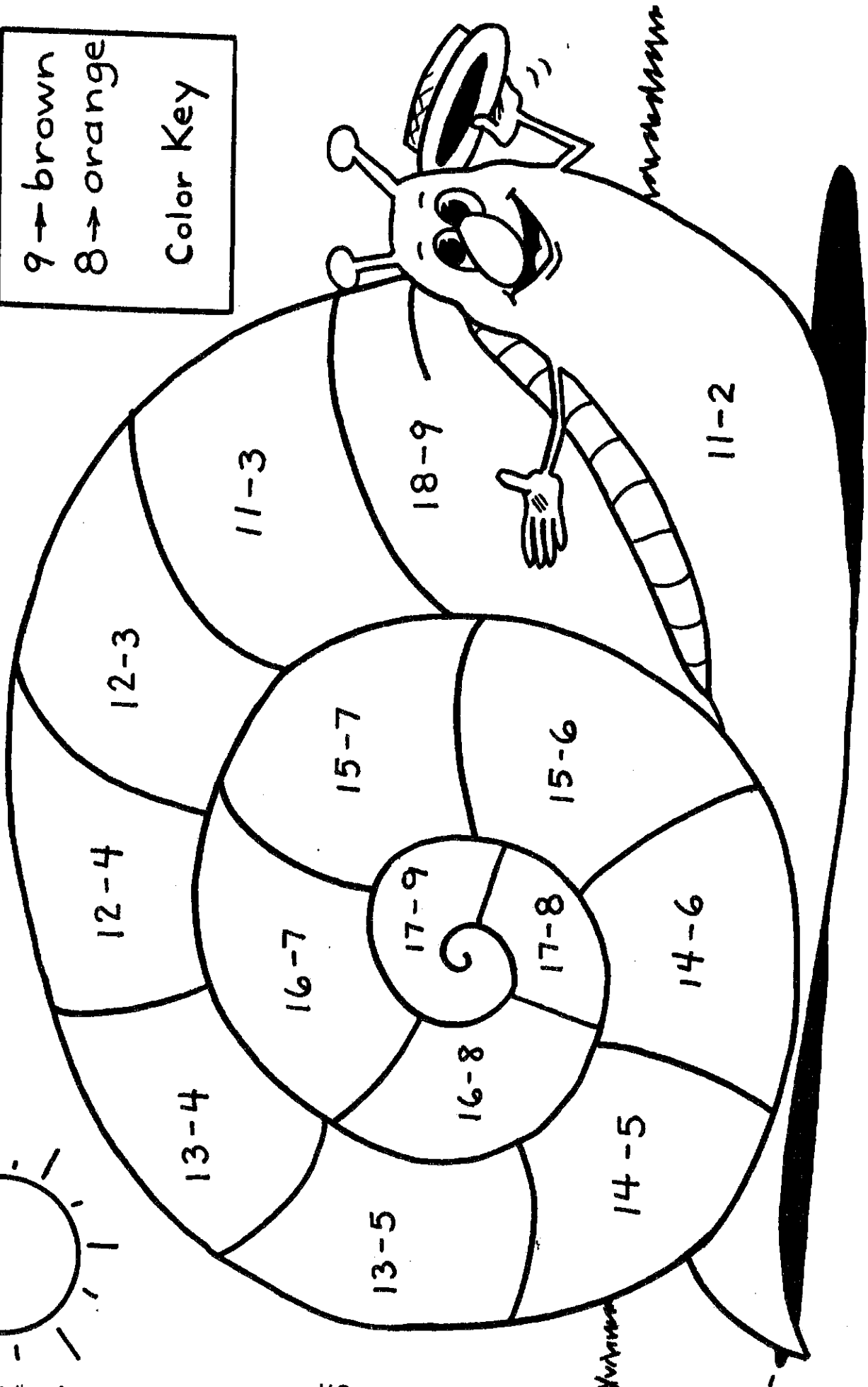



Name \_\_\_\_\_

Color the snail.  
Use the Color Key.

9 → brown  
8 → orange

Color Key

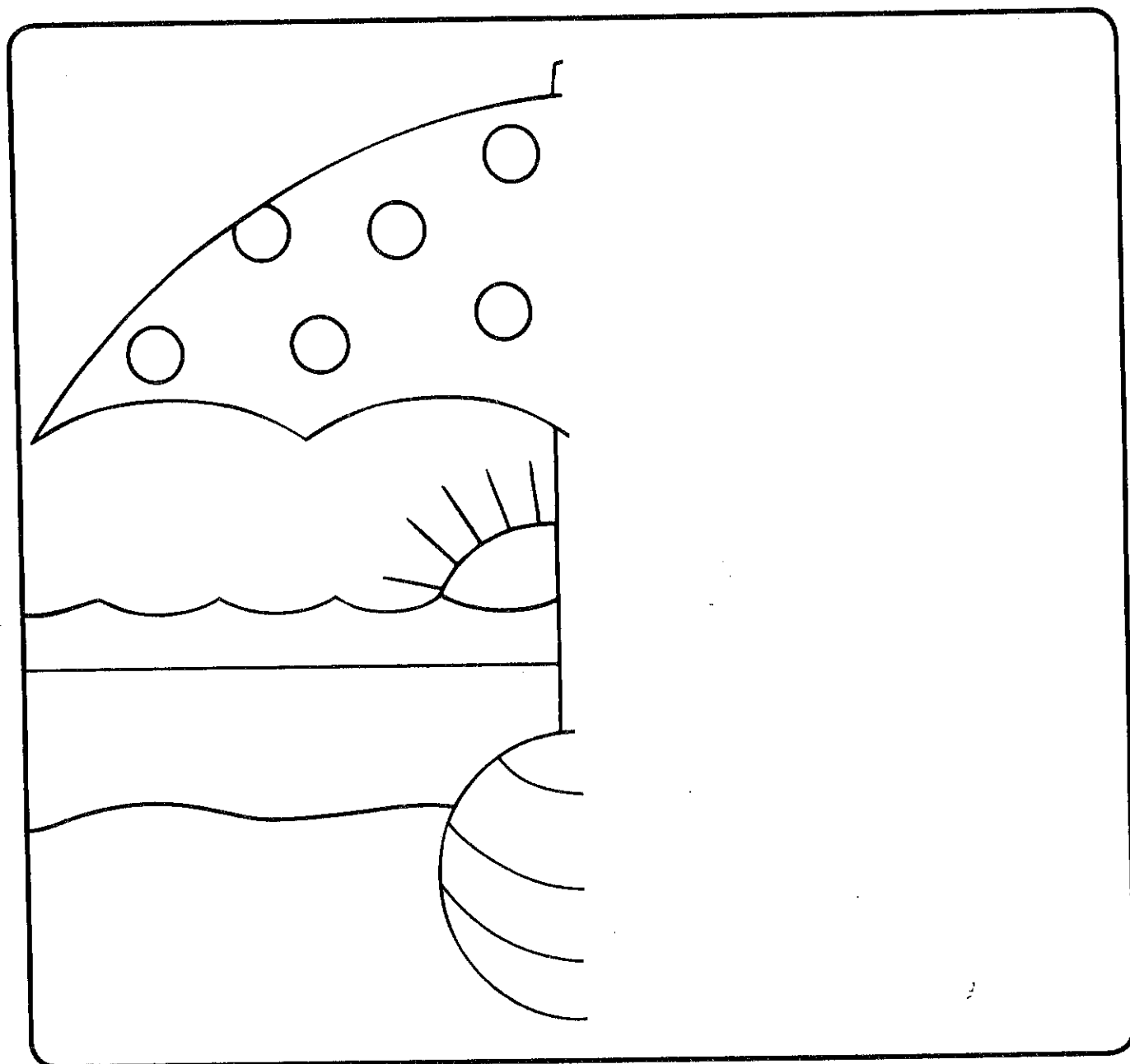




Name \_\_\_\_\_

# Fun in the Sun

Draw the other side of the picture. Draw yourself playing on the beach.  
Color the picture.



Why would you need an umbrella on a sunny day?

---

---



# How Much Money?

Add.


A.	$\begin{array}{r} 26\text{¢} \\ + 3\text{¢} \\ \hline \text{¢} \end{array}$	$\begin{array}{r} 35\text{¢} \\ + 4\text{¢} \\ \hline \text{¢} \end{array}$	$\begin{array}{r} 42\text{¢} \\ + 3\text{¢} \\ \hline \text{¢} \end{array}$	$\begin{array}{r} 16\text{¢} \\ + 1\text{¢} \\ \hline \text{¢} \end{array}$	$\begin{array}{r} 30\text{¢} \\ + 10\text{¢} \\ \hline \text{¢} \end{array}$
----	---	---	---	---	--

B.	$\begin{array}{r} 13\text{¢} \\ + 15\text{¢} \\ \hline \text{¢} \end{array}$	$\begin{array}{r} 40\text{¢} \\ + 13\text{¢} \\ \hline \text{¢} \end{array}$	$\begin{array}{r} 50\text{¢} \\ + 20\text{¢} \\ \hline \text{¢} \end{array}$	$\begin{array}{r} 22\text{¢} \\ + 60\text{¢} \\ \hline \text{¢} \end{array}$	$\begin{array}{r} 46\text{¢} \\ + 11\text{¢} \\ \hline \text{¢} \end{array}$
----	--	--	--	--	--

C.	$\begin{array}{r} 20\text{¢} \\ + 40\text{¢} \\ \hline \text{¢} \end{array}$	$\begin{array}{r} 37\text{¢} \\ + 31\text{¢} \\ \hline \text{¢} \end{array}$	$\begin{array}{r} 41\text{¢} \\ + 28\text{¢} \\ \hline \text{¢} \end{array}$	$\begin{array}{r} 24\text{¢} \\ + 61\text{¢} \\ \hline \text{¢} \end{array}$	$\begin{array}{r} 81\text{¢} \\ + 15\text{¢} \\ \hline \text{¢} \end{array}$
----	--	--	--	--	--

D.	$\begin{array}{r} 54\text{¢} \\ + 2\text{¢} \\ \hline \text{¢} \end{array}$	$\begin{array}{r} 16\text{¢} \\ + 21\text{¢} \\ \hline \text{¢} \end{array}$	$\begin{array}{r} 70\text{¢} \\ + 10\text{¢} \\ \hline \text{¢} \end{array}$	$\begin{array}{r} 47\text{¢} \\ + 31\text{¢} \\ \hline \text{¢} \end{array}$	$\begin{array}{r} 82\text{¢} \\ + 16\text{¢} \\ \hline \text{¢} \end{array}$
----	---	--	--	--	--

E.	$\begin{array}{r} 14\text{¢} \\ + 52\text{¢} \\ \hline \text{¢} \end{array}$	$\begin{array}{r} 92\text{¢} \\ + 7\text{¢} \\ \hline \text{¢} \end{array}$	$\begin{array}{r} 26\text{¢} \\ + 32\text{¢} \\ \hline \text{¢} \end{array}$	$\begin{array}{r} 10\text{¢} \\ + 51\text{¢} \\ \hline \text{¢} \end{array}$	$\begin{array}{r} 33\text{¢} \\ + 33\text{¢} \\ \hline \text{¢} \end{array}$
----	--	---	--	--	--





Match the problems to the correct answer.






$$\begin{array}{r} 63 \\ - 21 \\ \hline \end{array}$$

$$\begin{array}{r} 46 \\ - 25 \\ \hline \end{array}$$

$$\begin{array}{r} 96 \\ - 32 \\ \hline \end{array}$$

$$\begin{array}{r} 48 \\ - 15 \\ \hline \end{array}$$

$$\begin{array}{r} 60 \\ - 10 \\ \hline \end{array}$$



$$\begin{array}{r} 65 \\ - 23 \\ \hline \end{array}$$

$$\begin{array}{r} 25 \\ - 4 \\ \hline \end{array}$$

$$\begin{array}{r} 75 \\ - 11 \\ \hline \end{array}$$

$$\begin{array}{r} 54 \\ - 21 \\ \hline \end{array}$$

$$\begin{array}{r} 90 \\ - 40 \\ \hline \end{array}$$

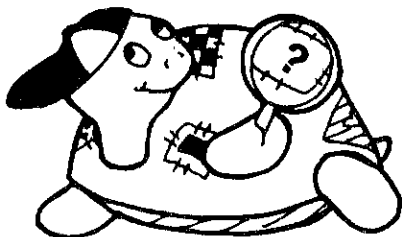



[illegible]

Name \_\_\_\_\_

- ▲ Fill in the boxes to make each sentence true.

- ▲ Make each sentence different.


$$\begin{array}{ccc} \square & > & \square \\ \square & < & \square \\ 3 & > & \square \\ \square & = & 5 \\ 1 & < & \square \\ \square & > & 9 \\ \square & < & 10 \end{array}$$


$\square = \square$   
 $\square > \square$   
 $7 < \square$   
 $\square > 6$   
 $\square = 10$   
 $2 > \square$   
 $\square < 1$

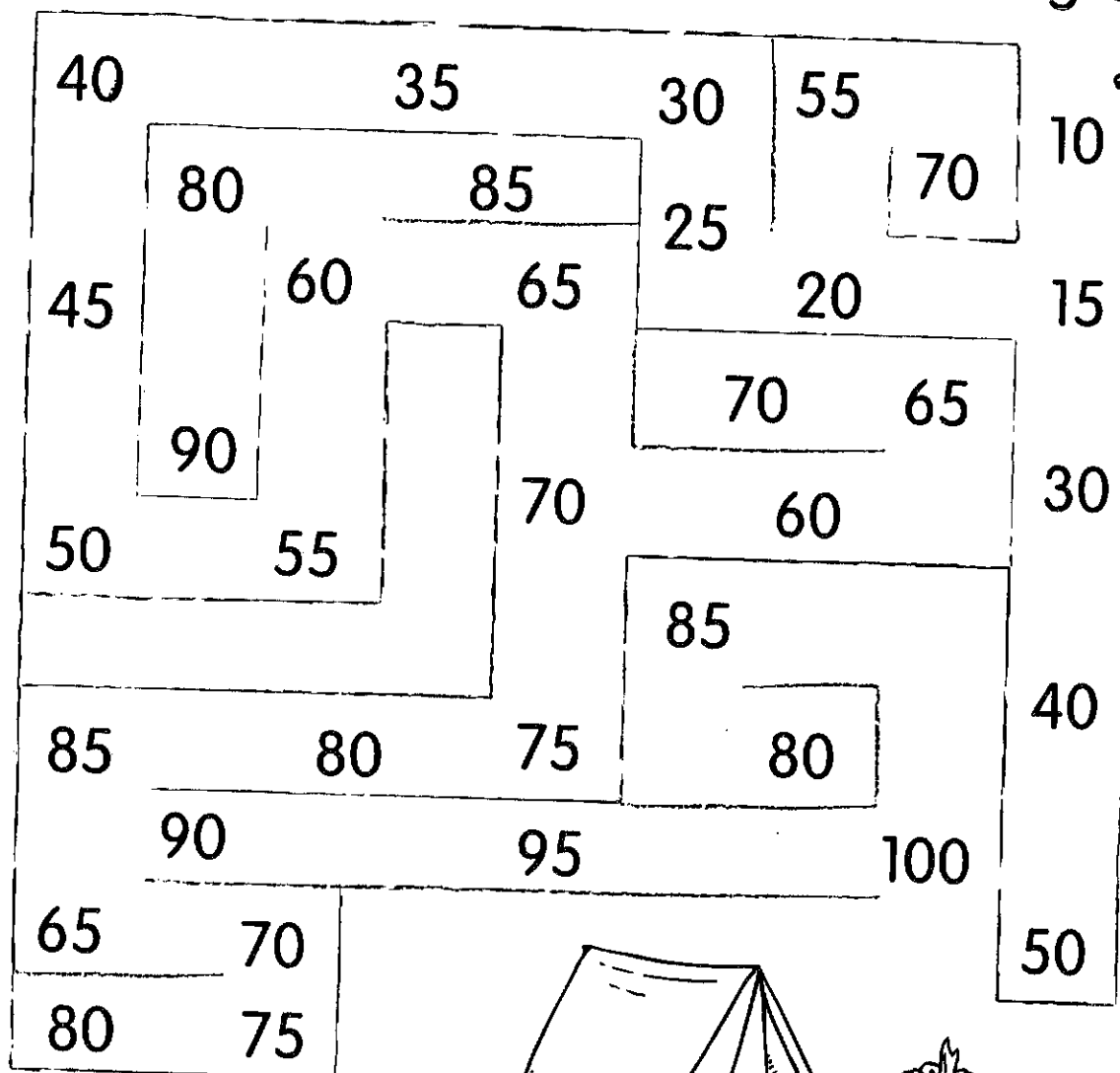

$$\begin{array}{ccc} \square & < & \square \\ \square & = & \square \\ 8 & > & \square \\ \square & < & 4 \\ 7 & < & \square \\ \square & > & 0 \\ 8 & = & \square \end{array}$$



Name \_\_\_\_\_

# Back to Camp

Help the tired camper find his way back to camp.  
Start at 0. Count by 5s to move through the maze.



Now write the numbers by 5s.


0      5      \_\_\_\_\_      20      \_\_\_\_\_  
 40      \_\_\_\_\_      \_\_\_\_\_      \_\_\_\_\_      75  
 \_\_\_\_\_      90      \_\_\_\_\_



# "Sum" Loops

Name \_\_\_\_\_

- ▲ Loop 3 or 4 numbers that make the given sum.
- ▲ There are at least 4 answers in each box.
- ▲ The numbers are in a straight line that goes across or down.



Sum of 7

3	1	3	7
4	5	2	5
0	1	7	2
4	6	6	0

Sum of 8


1	0	7	2
2	4	3	1
6	4	6	5
3	8	0	5

Sum of 9

7	0	2	3
4	1	6	0
9	5	8	1
2	3	4	5

Sum of 10

2	1	0	6
9	1	5	4
10	8	2	7
4	0	3	3






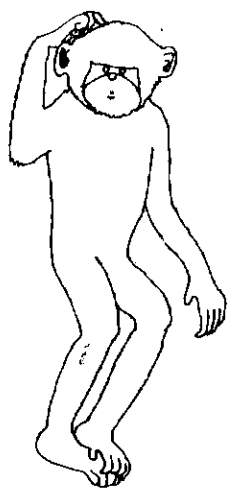
# Playtime

Skill: Counting by 2s to 38  
and by 5s to 60

Count by 2s.  
Then count by 5s.  
Begin at the ★.







Why did the monkey paint  
her toenails yellow?

4 - a

9 - h

13 - o

5 - b

10 - i

14 - r

6 - c

11 - l

15 - s

7 - d

12 - n

16 - t

8 - e

17 - u

19	15
- 4	- 2

18	13	16
- 3	- 4	- 8

12	17	19	15	15
- 6	- 4	- 2	- 4	- 8

15	17	11	17
- 6	- 7	- 4	- 9

10	18
- 0	- 6

19	16	14
- 3	- 7	- 6

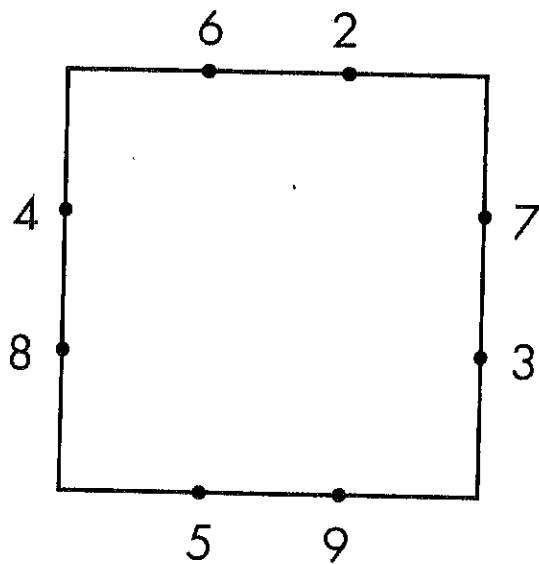

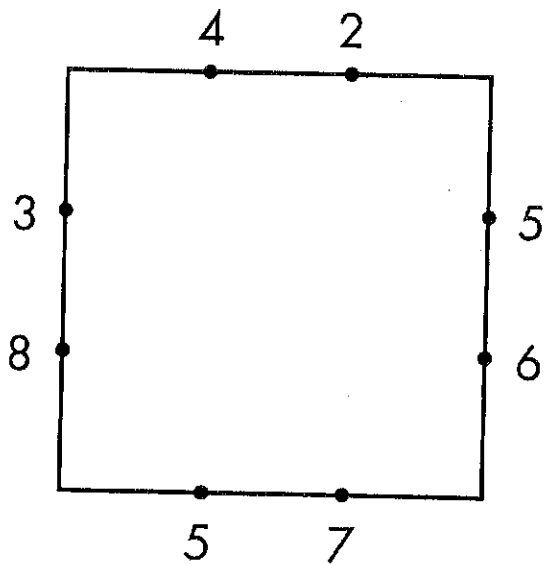


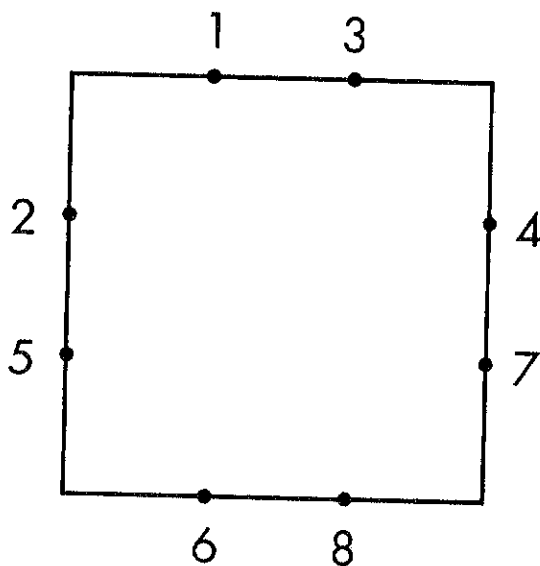
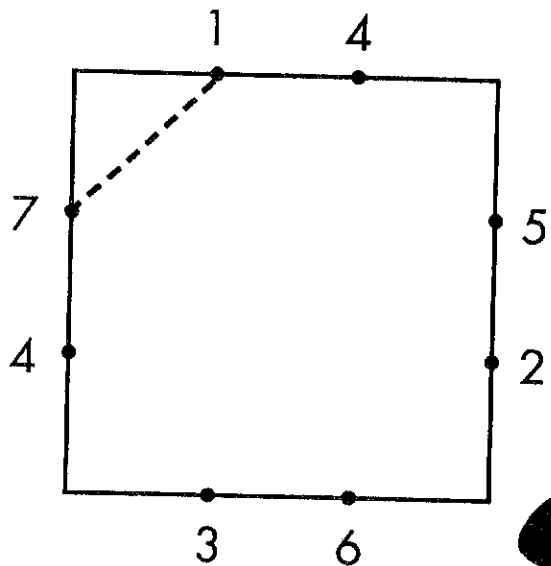
11	12	18	10	19	11
- 6	- 8	- 6	- 6	- 7	- 7

18	19	13	17
- 2	- 5	- 5	- 9



Name \_\_\_\_\_

- ▲ Connect pairs of numbers to make the given sum.
- ▲ Color your design.



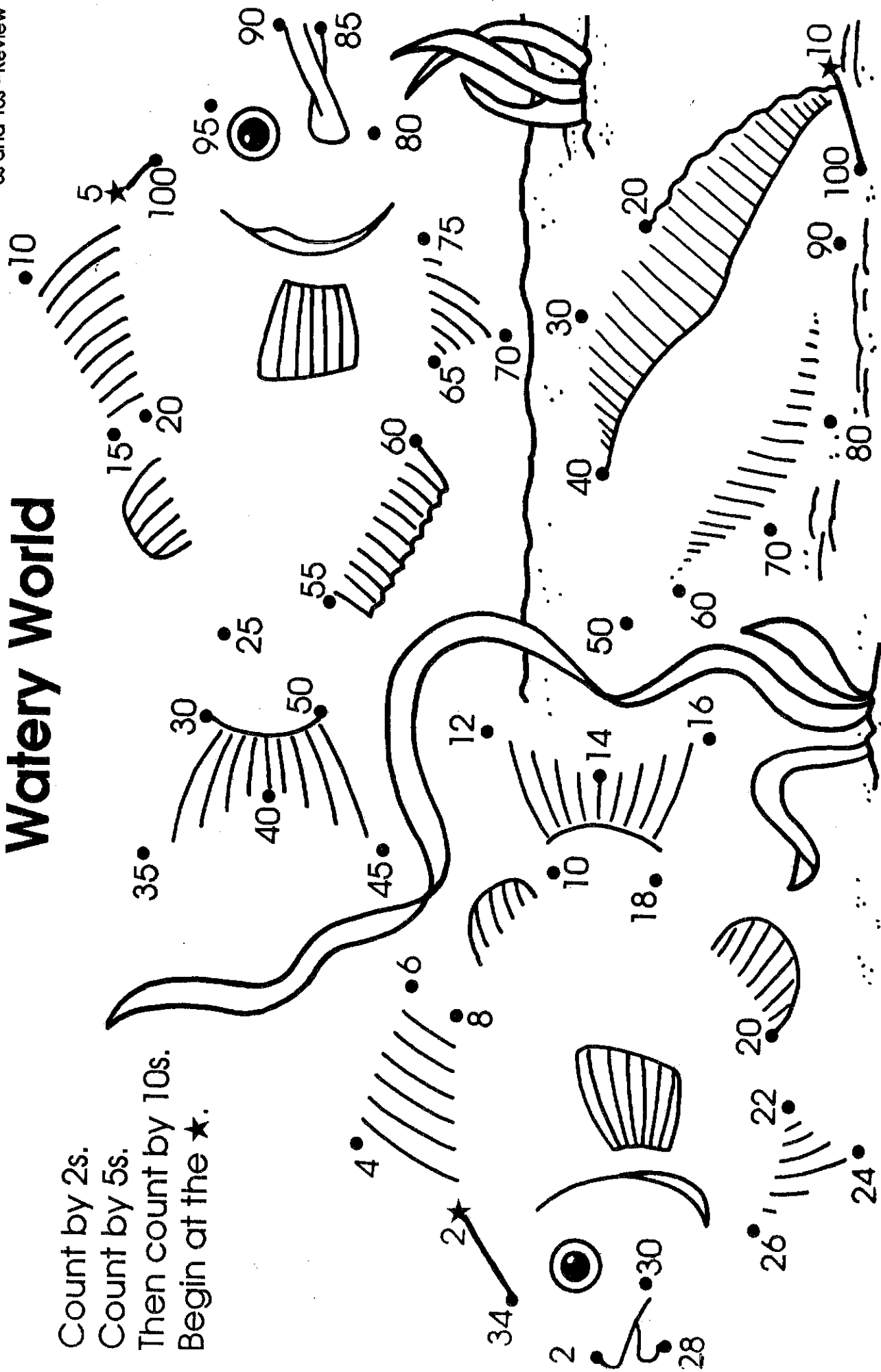


Name \_\_\_\_\_

Skill: Counting by 2s  
5s and 10s—Review

# Watery World

Count by 2s.  
Count by 5s.  
Then count by 10s.  
Begin at the ★.






**LESSON**  
**12.2****Telling Time to Five Minutes**


Write the time shown on each clock.

1.




\_\_\_\_ : \_\_\_\_

2.



\_\_\_\_ : \_\_\_\_

3.




\_\_\_\_ : \_\_\_\_

4.




\_\_\_\_ : \_\_\_\_

5.



\_\_\_\_ : \_\_\_\_


6.



\_\_\_\_ : \_\_\_\_


Draw the hour and minute hands to match the time.

7.




4:55

8.




7:25

9.




8:05

10.




1:50

11.



6:20

12.



10:40

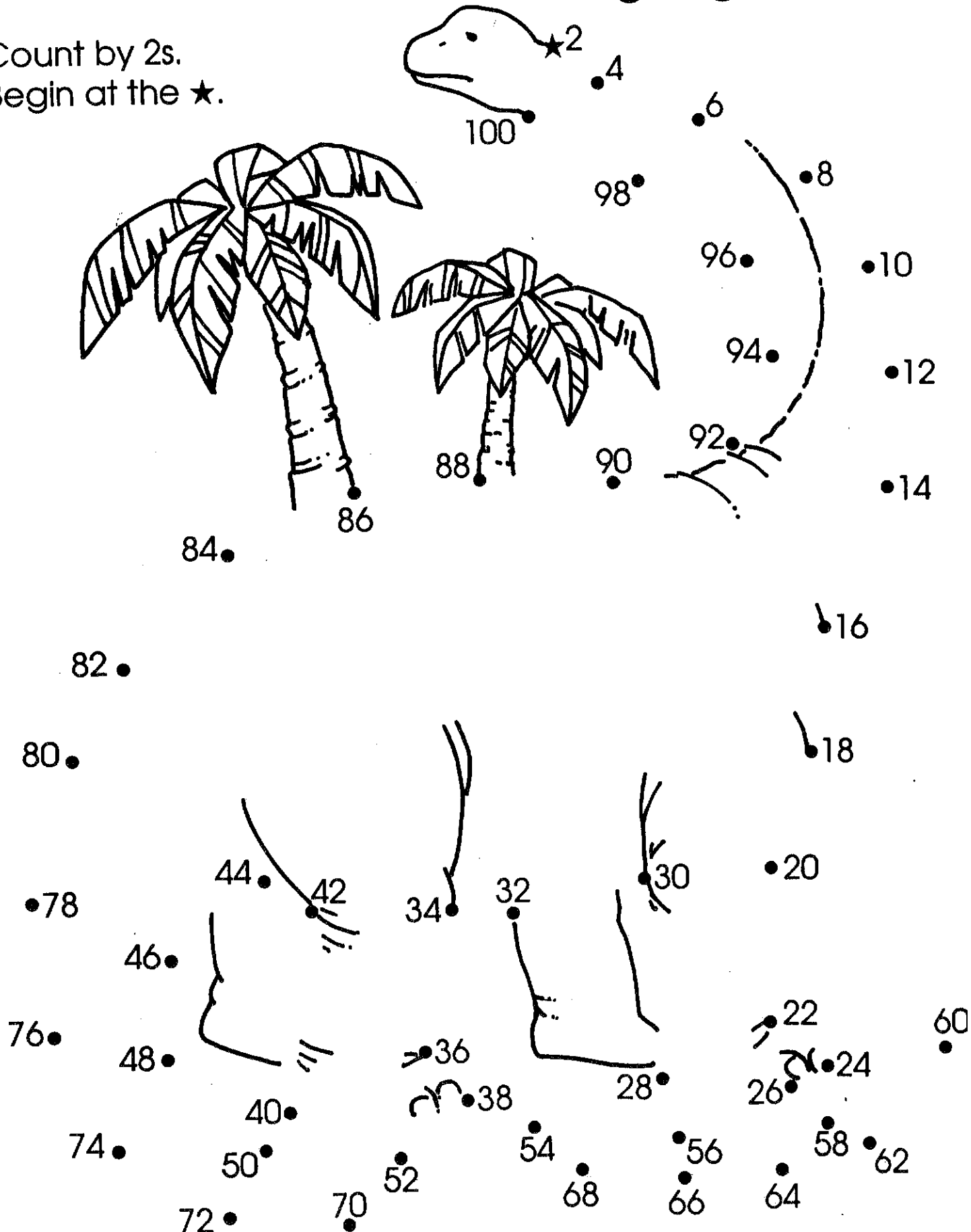


Name \_\_\_\_\_

Skill: Counting by 2s  
from 2 to 100

# Animal From Long Ago

Count by 2s.  
Begin at the ★.





# Hidden Sums of 9

Name \_\_\_\_\_

- ▲ Find the pairs that equal 9.
- ▲ Loop them.
- ▲ Find as many as you can.



5	4	9	7	2	4	5
8	5	0	8	0	1	4
1	6	7	1	9	8	1
8	3	2	5	4	6	3
7	6	7	0	3	2	7
3	2	4	5	2	1	9
6	0	9	6	3	8	0

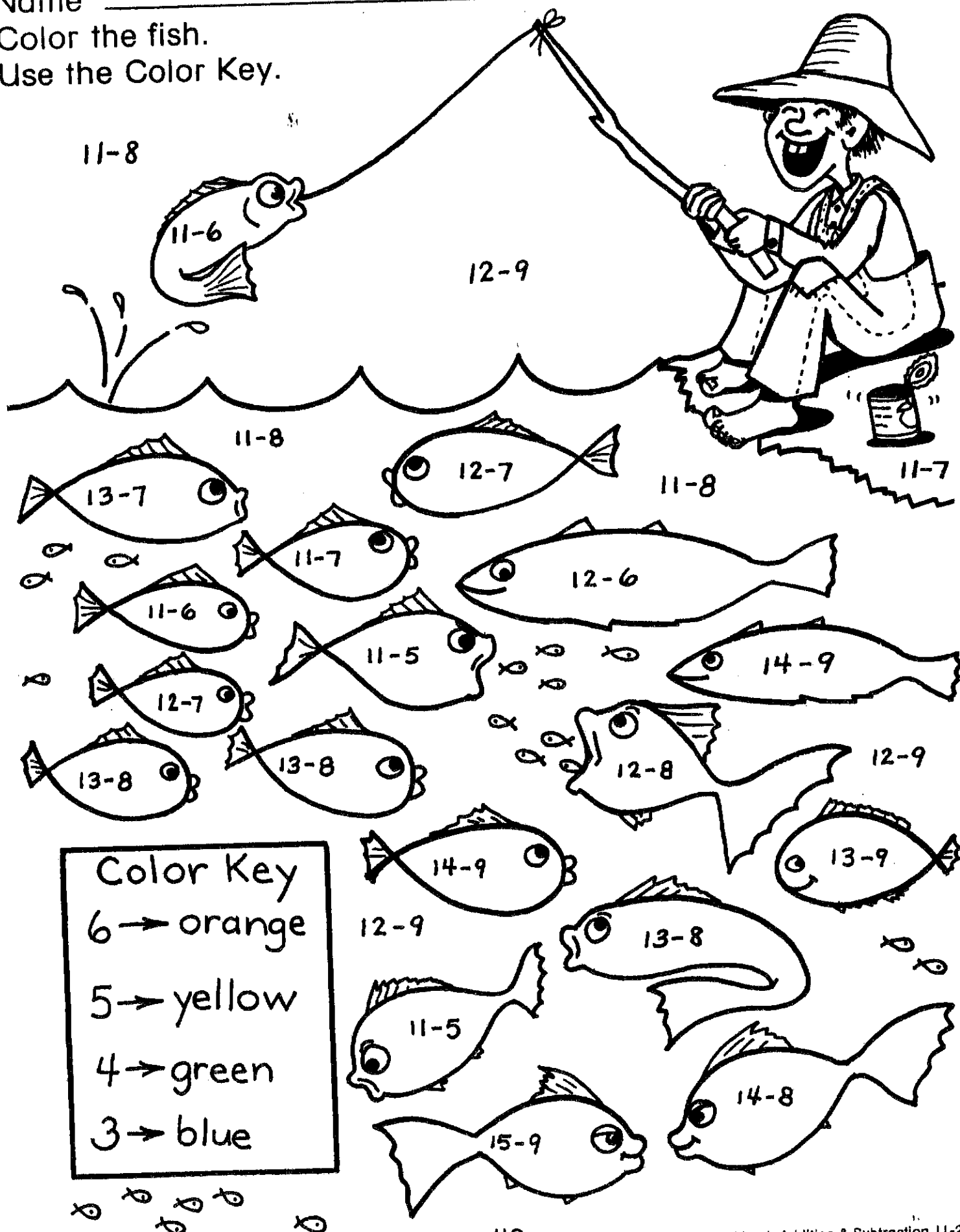


Name \_\_\_\_\_

Review: Subtraction to 18

Color the fish.


Use the Color Key.





Name \_\_\_\_\_

- ▲ Find the pairs that equal 8.
- ▲ Loop them.
- ▲ Find as many as you can.



7	1	5	2	6	0	8
6	8	3	0	6	4	5
2	0	7	8	2	4	3
4	6	2	1	6	7	1
1	7	6	4	4	7	5
5	4	5	0	6	1	3
3	4	3	8	2	0	8






# How much money do I have?

Tom 57¢  
Carlos 53¢

Kim 36¢  
Lester 32¢


Nell 29¢  
Sally 48¢

Put the right name on each coin purse.





Use the numbers in the shapes below to answer the problems.



a.  $\textcircled{5} + \boxed{6} = \underline{11}$

b.  $\triangle + \square = \underline{\quad}$

c.  $\square + \bigcirc = \underline{\quad}$

d.  $\square + \square = \underline{\quad}$

e.  $\bigcirc + \triangle = \underline{\quad}$

f.  $\triangle + \square = \underline{\quad}$


g.  $\square + \triangle = \underline{\quad}$

h.  $\square + \triangle = \underline{\quad}$

i.  $\square + \bigcirc = \underline{\quad}$

j.  $\bigcirc + \square = \underline{\quad}$

Fill in the answers to the problems below.  
Draw the correct shape for your answer.



k.  $18 - \boxed{9} = \underline{\boxed{9}}$

l.  $14 - \square = \underline{\quad}$

m.  $13 - \bigcirc = \underline{\quad}$

n.  $15 - \square = \underline{\quad}$

o.  $16 - \square = \underline{\quad}$

p.  $14 - \bigcirc = \underline{\quad}$

q.  $13 - \square = \underline{\quad}$

r.  $15 - \bigcirc = \underline{\quad}$

s.  $14 - \triangle = \underline{\quad}$

t.  $17 - \triangle = \underline{\quad}$

